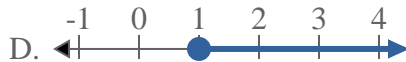
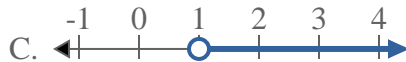
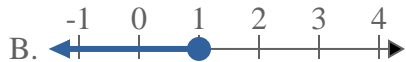
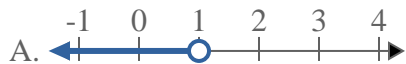


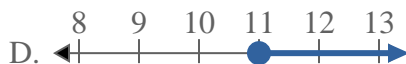
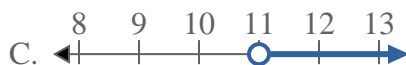


Solve each problem.

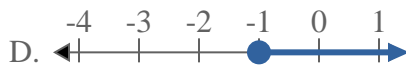
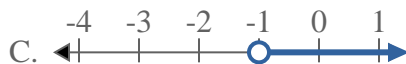
1) Which option best shows $X \leq 1$



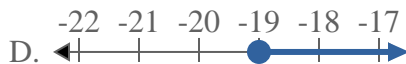
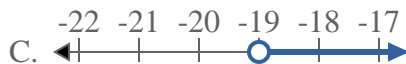
3) Which option best shows $X \geq 11$



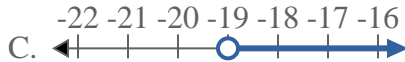
5) Which option best shows $X \geq -1$



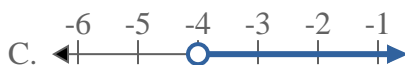
7) Which option best shows $X > -19$



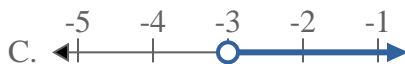
2) Which option best shows $X < -19$



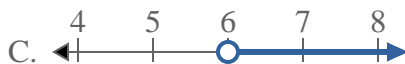
4) Which option best shows $X \geq -4$



6) Which option best shows $X \leq -3$



8) Which option best shows $X > 6$



Answers

1. _____

2. _____

3. _____

4. _____

5. _____

6. _____

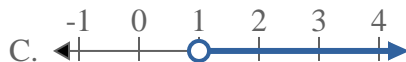
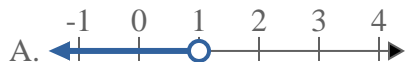
7. _____

8. _____

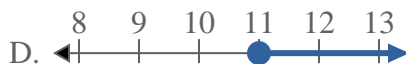
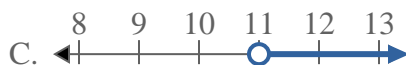


Solve each problem.

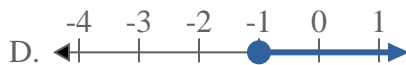
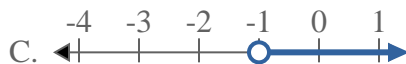
1) Which option best shows $X \leq 1$



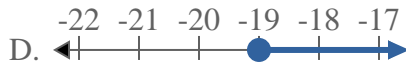
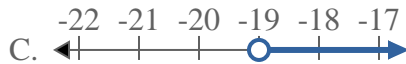
3) Which option best shows $X \geq 11$



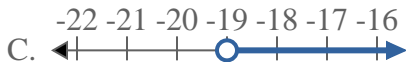
5) Which option best shows $X \geq -1$



7) Which option best shows $X > -19$



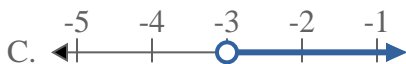
2) Which option best shows $X < -19$



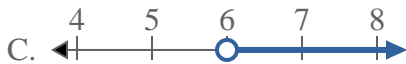
4) Which option best shows $X \geq -4$



6) Which option best shows $X \leq -3$



8) Which option best shows $X > 6$



Answers

1. **B**

2. **A**

3. **D**

4. **D**

5. **D**

6. **B**

7. **C**

8. **C**